

Teacher/User Name: J. Fortier

Name: _____

Practice Problems

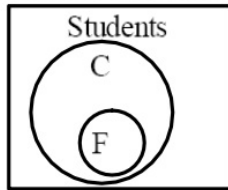
Period: _____ Date: _____

Fill in the blank with Always, Sometimes, or Never:

To print this page, set your options up to print background images.

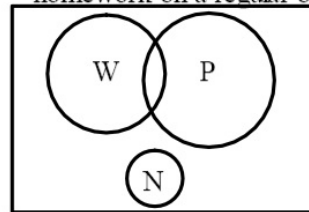
- 1) C = The number of students who chat online.
F = The number of students who do their homework on a regular basis.

The number of students who chat online are _____ the students who do their homework on a regular basis:



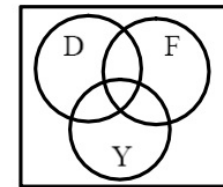
- 2) P = The number of students who take part in clubs.
N = The number of students who do their homework on a regular basis.
W = The number of students who play baseball

The number of students who play baseball are _____ the students who do their homework on a regular basis:



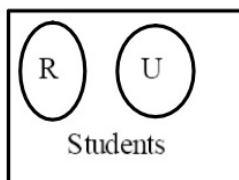
- 3) F = The number of students who are passing all their classes.
Y = The number of students who play football.
D = The number of students who use the computer for 3 hours a day.

The number of students who play football are _____ the students who use the computer for 3 hours a day:



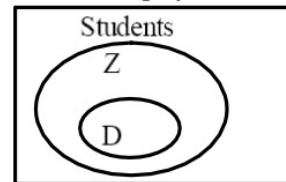
- 4) R = The number of students who do their homework on a regular basis.
U = The number of students who study in a library.

The number of students who do their homework on a regular basis are _____ the students who study in a library:



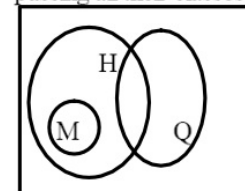
- 5) Z = The number of students who do their homework on a regular basis.
D = The number of students who play football.

The number of students who do their homework on a regular basis are _____ the students who play football:



- 6) M = The number of students who play baseball.
Q = The number of students who are passing all their classes.
H = The number of students who use the computer for 3 hours a day.

The number of students who play baseball are _____ the students who are passing all their classes:



Teacher/User Name: J. Fortier

Name: _____

Practice Problems

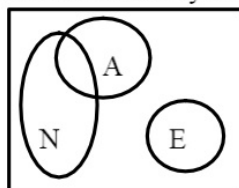
Period: _____ Date: _____

Fill in the blank with Always, Sometimes, or Never:

To print this page, set your options up to print background images.

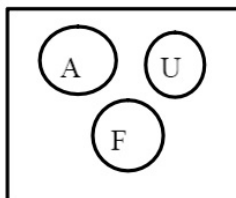
- 7) E = The number of students who study in a library.
A = The number of students who use the computer for 3 hours a day.
N = The number of students who play baseball.

The number of students who use the computer for 3 hours a day are _____ the students who study in a library:



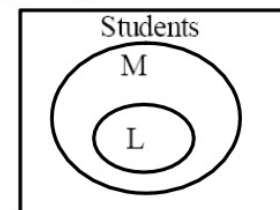
- 8) U = The number of students who play baseball.
F = The number of students who like candy.
A = The number of students who take part in clubs.

The number of students who play baseball are _____ the students who take part in clubs:



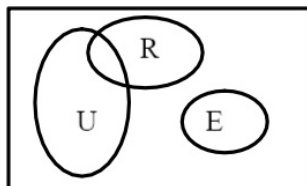
- 9) M = The number of students who are passing all their classes.
L = The number of students who play football.

The number of students who play football are _____ the students who are passing all their classes:



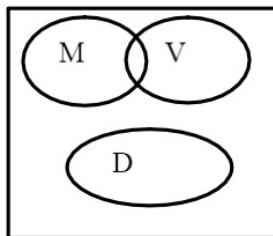
- 10) E = The number of students who play football.
R = The number of students who use the computer for 3 hours a day.
U = The number of students who are passing all their classes.

The number of students who play football are _____ the students who are passing all their classes:



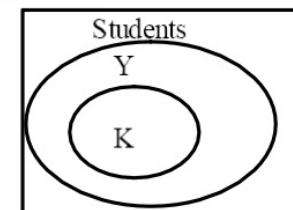
- 11) V = The number of students who play baseball.
D = The number of students who like candy.
M = The number of students with A's in math.

The number of students with A's in math are _____ the students who like candy:



- 12) Y = The number of students who take part in clubs.
K = The number of students who chat online.

The number of students who chat online are _____ the students who take part in clubs:



Teacher/User Name: J. Fortier

Name: _____

Practice Problems

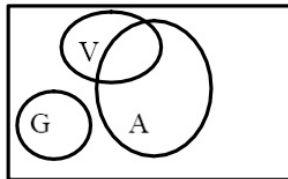
Period: _____ Date: _____

Fill in the blank with Always, Sometimes, or Never:

To print this page, set your options up to print background images.

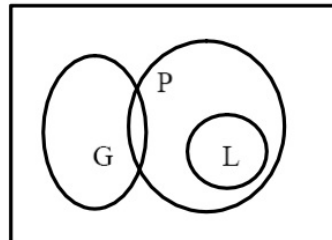
- 13) G = The number of students who do their homework on a regular basis.
V = The number of students who play football.
A = The number of students who use the computer for 3 hours a day.

The number of students who use the computer for 3 hours a day are _____ the students who students who do their homework on a regular basis:



- 15) G = The number of students who chat online.
L = The number of students who play football.
P = The number of students who play baseball.

The number of students who play baseball are _____ the students who students who play football:



- 14) Y = The number of students with A's in math.
L = The number of students who take part in clubs.
N = The number of students who use the computer for 3 hours a day.

The number of students with A's in math are _____ the students who students who take part in clubs:

